

Maths Challenge Cards

Are you a maths whizz ?



Copyright 2011 www.tpet.co.uk

Maths Challenge Cards


Are you a maths whizz ?



Copyright 2011 www.tpet.co.uk

★ What time does the clock read?

★ How would a digital clock show the time at twenty two minutes to three?



★ A walk to school takes 25 minutes. Candice needs to be at school by 10 to nine. What time does she need to leave? What would that time look like on a digital clock?



★ Is 278 closer to 200 or 300?

Is 278 closer to 270 or 280?

Is 278 closer to 275 or 280?

★ $452 = 400 + 50 + 2$

$452 = 300 + 150 + 2$


$452 = 200 + 200 + 52$

find 2 more
ways to partition

452

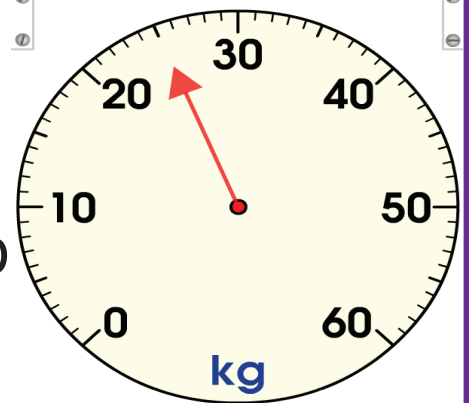
★ Find 4 ways to partition 653.





Read the scale.

- ★ How many more grams are needed to make 60 Kg?
- ★ How many grams is each division worth on the scale?
- ★ How many mls are there? 140mls are poured away.
- ★ What capacity is left?



Year 3



- ★ Put these numbers in order from smallest to largest: 304, 403, 43, 34, 430, 340.
- ★ Round 47 to the nearest 10.
- ★ If I keep subtracting 4 from 23 what is the smallest positive number I will get?
- ★ Continue the sequence:
9, 12, 15, 18, _____, _____, _____, _____,
- ★ Increase 1627 by 100.

Year 3



★ Which shapes do not have a right angle?




★ Write down 5 objects in your classroom that have right angles?

★ How many degrees are there on a straight line?

★ How many right angles are there on a straight line?



Year 3



A slice of bread weighs 60 grams.

★ How much do 5 slices weigh?

★ $300 \div 5 = \square \times \square$

Fill in the blanks.
What do you notice?

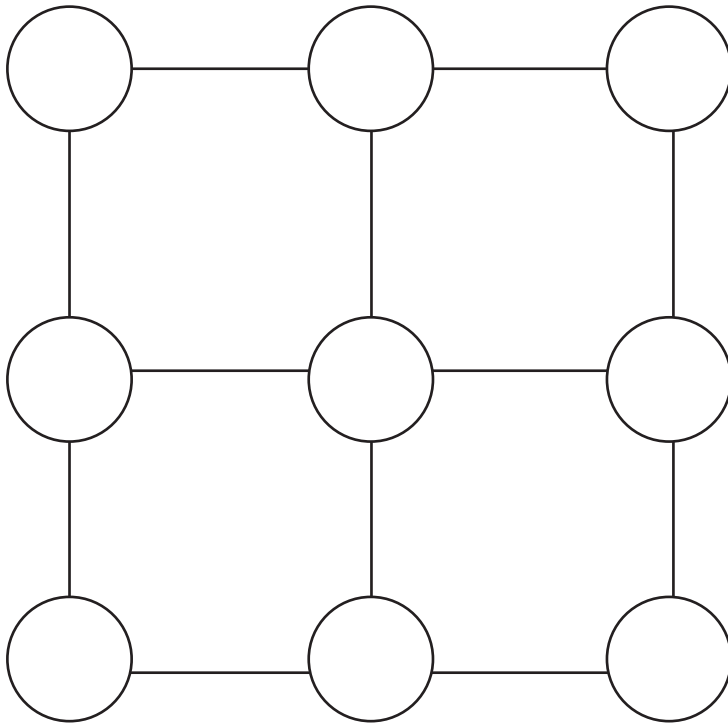
★ $8 \times 5 = \square \div \square$

★ $\square \div \square = 5$

★ $\square \div \square = 8$



Year 3



★ Can you put the digits 1 to 9 in the circles so that the difference between each pair is odd?




Year 3



=



=



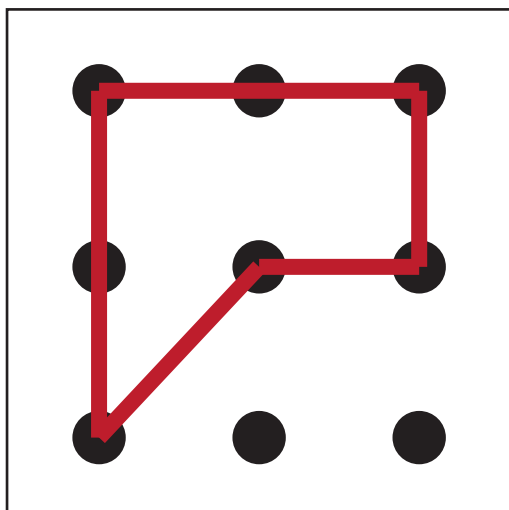
=



★ How many different ways can you make £1.77?



Year 3



★ How many 5 sided shapes can you make by joining the dots on the geoboard?

★ I have done the first one for you.
Don't forget to use a ruler!

★ What is a 5 sided shape called?



Year 3



★ What even totals can you score when you roll three dice?

★ Record your answers like this:

★ Blue Red Green Total is even
+ + =



Year 3